



Do you enjoy figuring out a good maths challenge?


When a solid cube is held up to the light, how many of the following shapes could its shadow have?



A 1



B 2



C 3



D 4

Join the Maths Enrichment Club co-curricular activity today!

Our Maths Enrichment Club is a place where you can explore exciting math concepts and engage in interesting problem-solving activities.

Interested?

Ms Goth or Mr James in Maths Staffroom

When?

After School Thursdays (3:30 – 4:45)

Room 313, Starting Week 5

Which of the following shaded regions has an area different from the other shaded regions?

